

No. of Printed Pages : 8

Sl. No.

Day - 3

GUNOTSAV, PHASE-I, 2022

Set - C

Class : I

(Language-1, Language-2 & Maths)

Medium : Garo

Name of the Student :


Roll No. : Class :

Name of the School :



SKIGIPARANGNA U·IATANI
* Chatro-chatrirang Q. No 1 oni 30-ona ong-gipako (✓) salsrete mesokgen.
* Skigparang sing-anirangko game poraie chatro-chatrirango sing-gen, ong-gipako (✓) salsrete mesokgen. Uni jamano skigparang chatro-chatrirangni aganchakani gita on-sogimin duulko external Evaluator-ni mikkango OMR lekkao gisimatgen.
* Skigipa chatro / chatrini bimung, Roll nos, class aro skulni bimungko gapatgen.

Language-1

1. Noksako nibo aro badia Peru ong.a.




2. Ka-mao on-sogimin matbaningrangoni badia a-kolo donga ?



3. Bangbango gapatbo :

M	a	
---	---	--

- (A) t
(B) h



4. Ka·mao segimin Kattao 'K' donga.

(A) Guk

(B) Kitap

5. Ka·mao on·sogimin Kattao Dalgipa oikor-chi sea basebo.

(A) Gijip

(B) Dolong


6. On·sogimin kattarangoni badio 'D' Katta donga ?

(A) Golap

(B) Do·de

7. On·sogimin Jujagipa kattako noksao nkgipa do-o baksa meliatbo.

(A) bidoma



(B) ILS

8. Ka·mao on·sogimin bostuko kalanio jakkala ?

(A) Robol


(B) Kolom

9. Ka·mao on·sogiminoni badia matburingni biming ong-a ?

(A) Dud

(B) Matma

10. Ka·mao on·sogimin noksako nie uni biming badiagipa 'N' chi a·bachenga




(A) (1)

(B) (2)

Language-2

11. Which of the following is the picture of a 'bat'?



(A) (1)

(B) (2)


12. Which of the following is the picture of a 'crow'?



(A) (1)

(B) (2)

13. Which of the following is the letter 'E' ?




(A) (1)

(B) (2)

14. Which of the following is the letter 'N' ?




(A) (1)



(B) (2)

15. Which of the following is the correct match ?



BUS

(A) (1)



BUS


(B) (2)

16. Which of the following is the correct match ?



ROSE

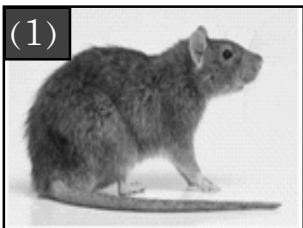
(A) (1)




ROSE

(B) (2)

17. Which object in the following pictures begins with the letter 'r' ?




(A) (1)



(B) (2)

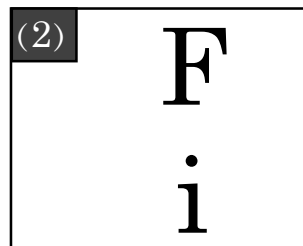
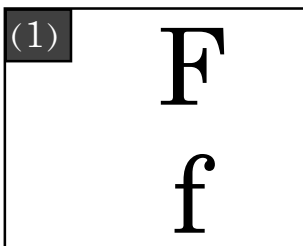
18. Which object in the following pictures begins with the letter 't' ?



(A) (1)

(B) (2)

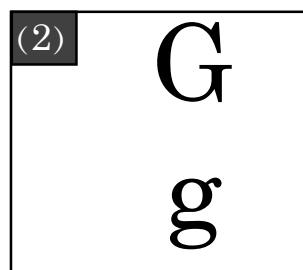
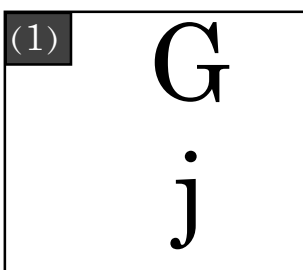
19. Which of the following is the correct match ?



(A) (1)

(B) (2)

20. Which of the following is the correct match ?




(A) (1)

(B) (2)

Mathematics

21.



Badia bite jrimbata ?

- (A) Te·gatchu
- (B) Ananos

22.



Anchingni jako badita ge jaksirang donga ?

- (A) 4
- (B) 5

23.



On·sogimin noksani noko do·gani bimangara mai rokomni ong·a ?




- (A) Ki·tik brigipa bimang
- (B) Ki·tik gittamgipa bimang

24. Biki-o rong 3 apple-rang donga. uni pagipa una rong 2 apple-rangko ondapaha. Uni jako chugimik badita rong apple-rang donggen ?

(A) 1

(B) 5

25.


	2
	- 1
	

Noksako nibo aro changale man·ako sebo.

(A) 1

(B) 3

26.

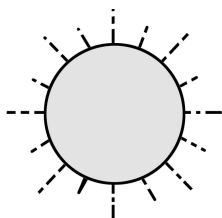


Bangbanggipa pul bibal-o mai rasi donga ?

(A) 10

(B) 12

27.






‘Sal naaon, anga chakata.’

Ia kamko na·a mai somoio daka ?

(A) Pringo

(B) Attamchipak

28.

4	
+ 3	+ 
	

Noksako nibo aro chandime man·ako·sebo.

(A) 6

(B) 7

29.



Narikel

Bol bijak

Badiagipa ritchengbata ?

(A) Narikel

(B) Bol bijak

30. 2 chikung 2 sa =

chikung	sa
2	

Bangbanggipa biapo mai rasi ong·gen ?

(A) 2

(B) 10

- o o o -