

No. of Printed Pages : 8

Sl. No.

Day - 2

GUNOTSAV, PHASE-I, 2022

Set - B

Class : I

(Language-1, Language-2 & Maths)

Medium : Garo

Name of the Student :

Roll No. : Class :


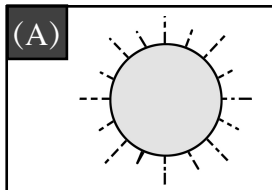
Name of the School :

SKIGIPARANGNA U·IATANI



- * Chatro-chatrirang Q. No 1 oni 30-ona ong·gipako (✓) salsrete mesokgen.
- * Skigparang sing·anirangko game poraie chatro-chatrirango sing·gen, ong·gipako (✓) salsrete mesokgen. Uni jamano skigiparang chatro-chatrirangni aganchakani gita on·sogimin duulko external Evaluator-ni mikkango OMR lekkao gisimatgen.
- * Skigipa chatro / chatrini bimung, Roll nos, class aro skulni bimungko gapatgen.

Language-1

1. Badia salni noksa ong·a mai.



2. On·sogimin matburingrangoni badia bilna mana ?



3. Bangbango gapatbo :

W	A	
---	---	--



(A) K

(B) T


4. Badiagipa, On·sogimin Katta-o 'e' donga ?
 (A) Do·gep (B) Do·kru

5. Dalgipa oikor·chi segipa Kattako basebo.
 (A) **G**olap (B) **B**OL

6. On·sogimin kattarangoni badiagipao 'O' oikor donga ?
 (A) Robol (B) Jal

7. On·sogimin jujagipa kattako noksao nikenggipa baksa meliatbo.

(A) SEME



(B) Ogd

8. On·sogimin bosturangoni badiako seanina jakkala ?
 (A) Mombati (B) Kolom

9. Ka·mao on·sogiminoni badia do·oni biming ong·a ?
 (A) Do·kru (B) Chibrim

10. Ka·mao on·sogimin noksarangko nibo aro badia 'P' oikor badiao dong·a.





(A) (2)



(B) (1)

Language-2



11. Which of the following is the picture of a 'carrot'?



(A) (1)

(B) (2)

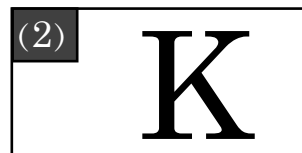
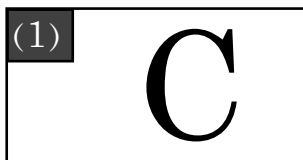
12. Which of the following is the picture of a 'horse'?



(A) (1)

(B) (2)

13. Which of the following is the letter 'C' ?



(A) (1)

(B) (2)

14. Which of the following is the letter 'A' ?



(A) (1)

(B) (2)

15. Which one of the following is the correct match ?




APPLE

APPLE

(A) (1)

(B) (2)

16. Which one of the following is the correct match ?



TOMATO

TOMATO

(A) (1)

(B) (2)



17. Which object in the following picture begins with the letter 'm' ?



(A) (1)

(B) (2)

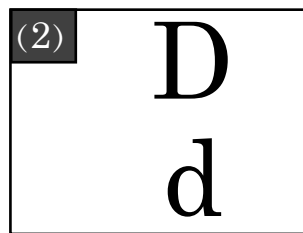
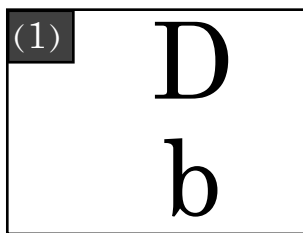
18. Which object in the following pictures begins with the letter 'f' ?



(A) (1)

(B) (2)

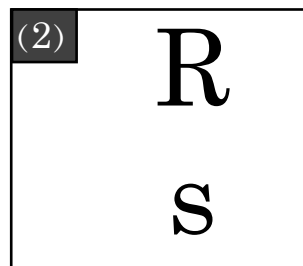
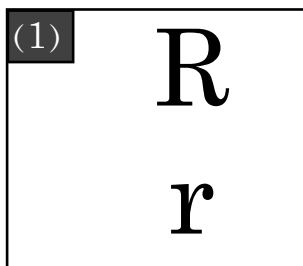
19. Which of the following is correct match ?



(A) (1)

(B) (2)

20. Which of the following is correct match ?



(A) (1)

(B) (2)

Mathematics

21.

**Bol 1****Bol 2**

ka-mao on-sogimin-oni badiagipa bol nok-oni chel-bata ?

(A) Bol 1

(B) Bol 2

22.



Kosako on-sogimin noksao badita mang ma-tokrang donga ?

(A) 3

(B) 2

23.



Rengrengsil chakkani Bimangara mai rokomni ?

(A) Dawilgipa bimang




(B) Ki-tik gittamgipa bimang

24. Biki-o rong 3 apple-rang donga. uni pagipa una rong 2 apple-rangko ondapaha. Uni jako chugimik badita rong apple-rang donggen ?

(A) 3

(B) 5

25.

	3
	- 1
	

Noksako nibo aro changale man·ako sebo.

(A) 2

(B) 3

26.

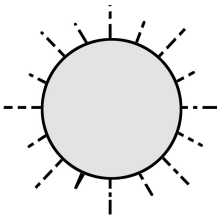
12	chigni
13	chigittam
	chibri
15	chibonga

Ka·mao on·sogimin·oni badiagipa bangbanggipa biapo ong·gen ?

(A) 11

(B) 14

27.






‘Sal naaon, anga chakata.’

Ia kamko na·a mai somoio daka ?

(A) Pringo

(B) Saljatchi

28.


 + 	5 + 2
	

Noksako nibo aro chandime man·akosebo.

(A) 7

(B) 8

29.  **Pencil 1**

 **Pencil 2**

Kosako on·sogimin pencil rangoni badia robata ?

(A) **Pencil 1**

(B) **Pencil 2**

30. Gittam chikung dok sa =

chikung	sa
3	

Bangbanggipa biapo mai rasi ong·gen ?

(A) 6

(B) 10

- o o o -