

Sl. No.

Name of the Student :

Roll No. : Class :

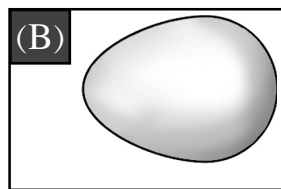

Name of the School :

INSTRUCTIONS FOR TEACHERS



- * Students will mark (✓) on the correct options against the Q.No 1 to 30.
- * The teacher will read out the questions and ask the students to mark (✓) on the correct option. After that the teacher will darken the circle as the response of the students in presence of the External Evaluator.
- * The teacher will fill in their names, Roll Nos, class, name of the school on their own.

Language-1

1. Which of the following is the picture of a fox ?



2. Which of the following animals lives in holes ?




3. Complete the word by filling in the missing letter given below.

R	a	
---	---	--

(A) t

(B) h



4. Which of the following words has 'l' in it ?

(A) nail

(B) book

5. Which of the following word starts with the letter 'V' ?

(A) **F**an

(B) **V**an

6. Which of the following words has the letter 'd' in it ?


(A) more

(B) done

7. Which of the following jumbled letters matches with the animal in the given picture ?

(A) neh

(B) xo



8. Which of the following things is used in Games ?

(A) Ball


(B) Pen

9. Which of the following is the name of an animal ?

(A) Milk

(B) Yak

10. Which of the following picture's name starts with letter 'K' ?



1



2

(A) 1

(B) 2

Language-2 (Assamese)

11. তলৰ কোনখন 'কলহ'ৰ ছবি?



1




2

(A) 1

(B) 2

12. তলৰ কোনখন 'পাৰ চৰাই'ৰ ছবি?



1



2

(A) 1

(B) 2

13. তলৰ কোনটো আখৰ 'এ'?



1



2

(A) 1

(B) 2

14. তলৰ কোনটো আখৰ 'ম'?



1



2

(A) 1

(B) 2

15. তলৰ কোনখন ছবিৰ নামটো শুদ্ধকৈ দিয়া আছে?



উৰাজাহাজ

1



উৰাজাহাজ

2

(A) 1

(B) 2

16. তলৰ কোনখন ছবিৰ নামটো শুদ্ধকৈ দিয়া আছে?



আনাৰস

1




আনাৰস

2


(A) 1

(B) 2

17. ছবিত থকা কোনটো জন্তুৰ নাম 'হ' আখৰেৰে আৰম্ভ হৈছে?



1



2

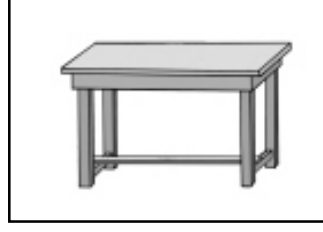
(A) 1

(B) 2

18. ছবিত থকা কোনটো বস্তুৰ নাম 'চ' আখৰেৰে আৰম্ভ হৈছে?



1



2

(A) 1

(B) 2

19. তলৰ কোনটো শাৰী শুদ্ধ ক্ৰমত আছে?



1

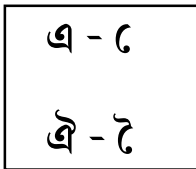


2

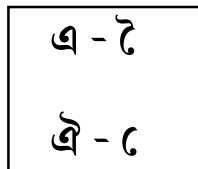
(A) 1

(B) 2

20. তলৰ কোনটো বাক্যত স্বৰবৰ্ণ আৰু স্বৰচিহ্নৰ মিল আছে?



1



2

(A) 1


(B) 2

Language-2 (Bodo)

11. गाहायनि बबे सावगारिया थोबसे बलनि सावगारि ?



1



2

(A) 1

(B) 2

12. गाहायनि बबे मासेया 'दाउखा'नि सावगारि ?



1



2


(A) 1

(B) 2

13. गाहायनि बबे मोनसेया 'इ' हांखोनि महर ?



1



2


(A) 1

(B) 2

14. गाहायनि बबे मोनसेया 'न' हांखोनि महर ?



1



2

(A) 1

(B) 2

15. बबे सोदोबा सावगारिजों गोरोबो ?



बास
1



बास
2

(A) 1

(B) 2

16. बबे सोदोबा सावगारिनि बिबारजों गोरोबो ?



ग'लाप
1

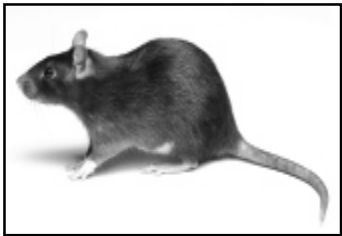


ग'लाप
2

(A) 1

(B) 2

17. सावगारिनि बबे मुवाया 'ए' हांखोजों जागायजेन्नाय ?



1



2

(A) 1

(B) 2

18. सावगारिनि बबे मुवाया 'ग' हांखोजों जागायजेन्नाय ?



1




2


(A) 1

(B) 2

19. बबे हांखोया फारियै गोरोबो ?



1

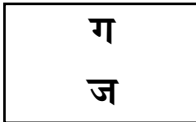


2

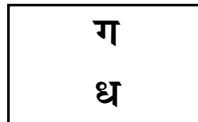
(A) 1

(B) 2

20. बबे हांखोया फारियै गोरोबो ?



1



2

(A) 1

(B) 2

Language-2 (Bengali)

11. নীচের কোনটি ব্যাট এর ছবি ?



(ক) ১

(খ) ২

12. নীচের কোনটি একটি কাকের ছবি ?



(ক) ১

(খ) ২

13. নীচের কোনটি 'এ' বর্ণ ?

এও

এ

(১)

(২)

(ক) ১

(খ) ২

14. নীচের কোনটি 'ঘ' বর্ণ?



(১)


(ক) ১



(২)

(খ) ২

15. কোন ছবিটির নাম ও ছবির সঠিক মিল আছে?



বাস


(ক) ১



বাস


(খ) ২

16. কোন ছবিটির নামের সঙ্গে সঠিক মিল আছে?



গোলাপ ফুল

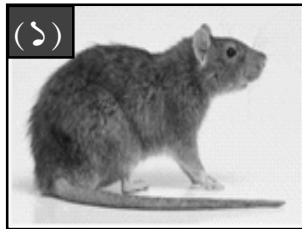
(ক) ১



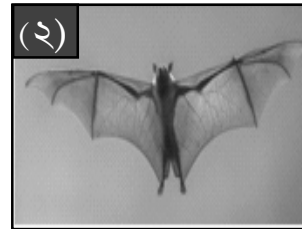
গোলাপ ফুল

(খ) ২

17. কোন প্রাণীটির নাম 'ব' দিয়ে শুরু হয়?




(ক) ১




(খ) ২

18. ছবিতে দেওয়া কোন বস্তুটির নাম 'হ' দিয়ে শুরু হয় ?




(ক) ১



(খ) ২

19. ছবিতে দেওয়া কোন বস্তুটির নাম 'চ' দিয়ে শুরু হয় ?



(১)

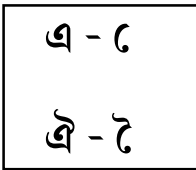
(ক) ১



(২)

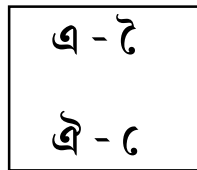
(খ) ২

20. নীচের কোনটিতে স্বরবর্ণ এবং ব্যঞ্জনবর্ণের সাদৃশ্য আছে ?



(১)

(ক) ১



(২)

(খ) ২

Mathematics

21.



Which fruit is heavier ?

(A) Mango

(B) Pineapple

22.



How many fingers are there in one hand ?

(A) 4

(B) 5

23.






What is the shape of the door in the house given in figure ?

(A) Four cornered shape

(B) Three cornered shape


24. Biki has 3 apples.
His father gives him 2 more apples.
How many apples are there in his hand ?
(A) 1
(B) 5

25.

	2
	- 1
	

Look at the figure and write the subtracted value.

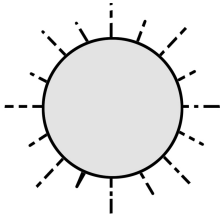
- (A) 1
(B) 3



What is the number in the blank flower ?

- (A) 10
(B) 12

27.






'The sun rises. I wake up.'

At what time you do this work ?

(A) Morning

(B) Afternoon

28.

4	
+3	+ 
	

Look at the picture and write the sum.

(A) 6

(B) 7

29.



Coconut



Leaf

Which one is lighter ?

(A) Coconut

(B) Leaf

30. 2 tens 2 ones =

tens	ones
2	

What will be the number in the blank place ?

(A) 2

(B) 10

- o 0 o -