

Name of the Student : .....

Roll No. : ..... Class : .....


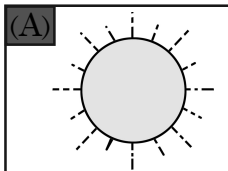
Name of the School : .....

**INSTRUCTIONS FOR TEACHERS**



- \* Students will mark (✓) on the correct options against the Q.No 1 to 30.
- \* The teacher will read out the questions and ask the students to mark (✓) on the correct option. After that the teacher will darken the circle as the response of the students in presence of the External Evaluator.
- \* The teacher will fill in their names, Roll Nos, class, name of the school on their own.

**Language-1**

1. Which of the following is the picture of an axe ?



2. Which of the following animals can fly in the sky ?



3. Complete the word by filling in the missing letter given below.

B	a	
---	---	--

(A) r

(B) t



4. Which of the following words has 'e' in it ?

(A) tree

(B) lion

---

5. Which of the following words starts with the letter 'M' ?

(A) **J**ug

(B) **M**an

---

6. Which of the following words has the letter 'r' in it ?

(A) car

(B) net

---

7. Which of the following jumbled letters matches with the animal in the given picture ?



(A) art

(B) ogd

---

8. Which of the following things is used to write ?

(A) Candle

(B) Pen

---

9. Which of the following is the name of a bird ?

(A) Dove

(B) ant


---

10. Which of the following picture's name starts with the letter 'T' ?



1

(A) 1



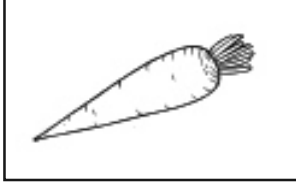
2

(B) 2

---

## Language-2 (Assameses)

11. তলৰ কোনখন 'গাজৰ'ৰ ছবি?



1



2


(A) 1

(B) 2

12. তলৰ কোনখন 'বাদুলী'ৰ ছবি?



1



2

(A) 1

(B) 2

13. তলৰ কোনটো আখৰ 'থ'?



1



2

(A) 1

(B) 2

14. তলৰ কোনটো আখৰ 'চ'?



1



2

(A) 1

(B) 2

15. তলৰ কোনখন ছবিৰ নামটো শুদ্ধকৈ দিয়া আছে?



1

কল



2

কল

(A) 1


(B) 2

16. তলৰ কোনখন ছবিৰ নামটো শুদ্ধকৈ দিয়া আছে?



1

চাবোন



2

চাবোন

(A) 1

(B) 2

17. ছবিত থকা কোনটো বস্তুৰ নাম 'ৰ' আখৰেৰে আৰম্ভ হৈছে?



1



2

(A) 1

(B) 2

18. ছবিত থকা কোনটো বস্তুৰ নাম 'ব' আখৰেৰে আৰম্ভ হৈছে?



1



2

(A) 1

(B) 2

19. তলৰ কোনটো শাৰী শুদ্ধ ক্ৰমত আছে?



1

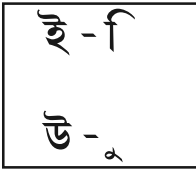


2

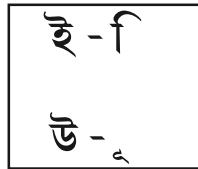
(A) 1

(B) 2

20. তলৰ কোনটো বাক্যত স্বৰবৰ্ণ আৰু স্বৰচিহ্নৰ মিল আছে?



1



2

(A) 1

(B) 2

**Language-2 (Bodo)**

11. गाहायनि बबेया 'गाजर'नि सावगारि ?



1



2

(A) 1

(B) 2

12. गाहायनि बबेया गरायनि सावगारि ?



1



2

(A) 1

(B) 2

13. गाहायनि बबेया 'स' हांखोनि महर ?



1



2

(A) 1

(B) 2

14. गाहायनि बबे मोनसेया 'अ' हांखो ?



1



2

(A) 1

(B) 2

15. गाहायनि सावगारिया बबे सोदोबजों गोरोबो ?



1

आपेल




2

आपेल

(A) 1

(B) 2

16. बबे मुवाया सोदोबजों थारैनो गोरोबनाय ?



1

थमेथ'



2

थमेथ'

(A) 1

(B) 2

17. सावगारिनि बबे मुवाया 'म' हांखोजों जागाय जेन्नाय ?



1



2

(A) 1

(B) 2

18. सावगारिनि बबे मुवाया 'फ' हांखोजों जागाय जेन्नाय ?



1




2

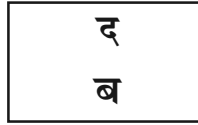
(A) 1

(B) 2

19. बबे हांखोया फारिखै गोरोबलायो ?



1

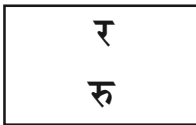


2

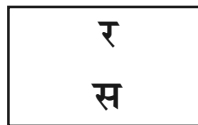
(A) 1

(B) 2

20. बबेया थारैनो गोरोब लायो ?



1



2



(A) 1

(B) 2



## Language-2 (Bengali)


11. নীচের কোনটি গাজরের ছবি ?



(ক) ১

(খ) ২

12. নীচের কোনটি ঘোড়ার ছবি ?



(ক) ১

(খ) ২

13. নীচের কোন বর্ণটি 'থ' ?

ফ

থ

(১)

(২)

(ক) ১

(খ) ২

14. নীচের কোন বর্ণটি 'চ' ?

ট

চ


(১)

(২)


(ক) ১

(খ) ২

15. নীচের কোনটি সঠিক মিল ?



আম




আম


(ক) ১

(খ) ২

16. কোনটিতে সঠিক মিল আছে?



আপেল



আপেল

(ক) ১

(খ) ২

17. নীচের কোন ছবিটির নাম 'ম' দিয়ে শুরু হয় ?




(ক) ১




(খ) ২

18. নীচের কোন ছবিটির নাম 'ফ' দিয়ে আরম্ভ হয়।



(ক) ১



(খ) ২

19. নীচের কোনটি সঠিক ক্রমে আছে ?

ক	খ	গ	ঘ	ঙ
---	---	---	---	---

(১)

ক	খ	ঘ	গ	ঙ
---	---	---	---	---

(২)

(ক) ১

(খ) ২

20. নীচের কোন বাস্তব স্বরবর্ণ এবং স্বরচিহ্নের সাদৃশ্য আছে ?

ই - ি
উ - ু

(১)

ই - ি
উ - ু

(২)

(ক) ১

(খ) ২

---

**Mathematics**

21.



**Tree 1**

**Tree 2**

Which of the following tree is far away from the house ?

(A) Tree 1

(B) Tree 2

---

22.



How many fishes are there in the picture ?

(A) 2

(B) 3

---

23.



What is the shape of the wheels of a bicycle ?

(A) Round shape

(B) Three cornered shape

---

24. Biki has 3 apples.




His father gives him 2 more apples.

How many apples are there in his hand ?

(A) 3

(B) 5

25.

	3
	- 1
	

Look at the figure and write the subtracted value.

(A) 2

(B) 3

26.

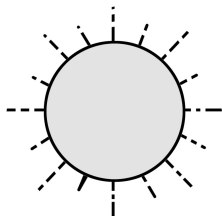
12	Twelve
13	Thirteen
	Fourteen
15	Fifteen

Which of the following will be in the blank place ?

(A) 11

(B) 14

27.



'The sun rises. I wake up.'

At what time you do this work ?

(A) Morning

(B) Afternoon

28.

	5 + 2

Look at the picture and write the sum.

(A) 7

(B) 8

29.



Pencil 1



Pencil 2

Which of the above pencils is longer ?

(A) Pencil 1

(B) Pencil 2

30. Three tens six ones =

tens	ones
3	

What will be the number in the blank place ?

(A) 6

(B) 10

**- o 0 o -**

