

Name of the Student :

Roll No. : Class :



Name of the School :

INSTRUCTIONS FOR TEACHERS

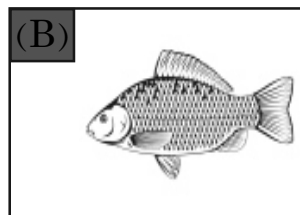
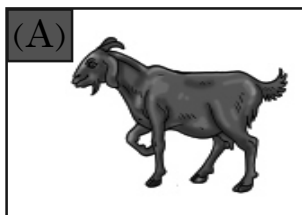
- * Students will mark (✓) on the correct options against the Q.No 1 to 30.
- * The teacher will read out the questions and ask the students to mark (✓) on the correct option. After that the teacher will darken the circle as the response of the students in presence of the External Evaluator.
- * The teacher will fill in their names, Roll Nos, class, name of the school on their own.

Language-1

1. Which of the following is the picture of a butterfly ?



2. Which of the following animals live in water ?



3. Complete the word by filling in the missing letter given below.

c	a	
---	---	--

- (A) t
- (B) i



4. Which of the following words has 'a' in it ?

- (A) ten (B) axe
-

5. Which of the following words starts with the letter 'H' ?

- (A) **B**all (B) **H**at
-

6. Which of the following words has the letter 't' in it ?

- (A) ant (B) fan
-

7. Which of the following jumbled letters matches with the animal in the given picture ?

- (A) wco
(B) afx





8. Which of the following things is used in the kitchen ?

- (A) Pan (B) Pen
-

9. Which of the following is the name of a flower ?

- (A) Rose (B) Apple
-


10. Which of the following picture's name starts with the letter 'D' ?




- (A) 1 (B) 2
-

Language-2 (Assamese)

11. তলৰ কোনখন 'কুকুৰ'ৰ ছবি?



1




2


(A) 1

(B) 2

12. তলৰ কোনখন 'কুকুৰা'ৰ ছবি?



1



2

(A) 1

(B) 2

13. তলৰ কোনটো আখৰ 'ত'?



1



2

(A) 1

(B) 2

14. তলৰ কোনটো বৰ্ণ 'গ'?



1

(A) 1

(B) 2



2

15. তলৰ কোনখন ছবিৰ নামটো শুদ্ধকৈ দিয়া আছে?



ভাটো

1

(A) 1

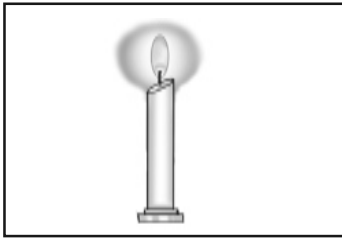
(B) 2



ভাটো

2

16. তলৰ কোনখন ছবিৰ নামটো শুদ্ধকৈ দিয়া আছে?



চাকি

1

(A) 1


(B) 2



চাকি

2

17. ছবিত থকা কোনটো বস্তুৰ নাম 'ত' আখৰেৰে আৰম্ভ হৈছে?



1



2


(A) 1

(B) 2

18. ছবিত থকা কোনটো চৰাইৰ নাম 'ফ' আখৰেৰে আৰম্ভ হৈছে?



1



2

(A) 1

(B) 2

19. তলৰ কোনটো শাৰী শুদ্ধ ক্ৰমত আছে?



1

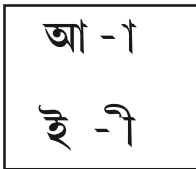


2


(A) 1

(B) 2

20. তলৰ কোনটো বাক্যত স্বৰবৰ্ণ আৰু স্বৰচিহ্নৰ মিল আছে?



1



2

(A) 1

(B) 2

Language-2 (Bodo)

11. गाहायनि बबेया मासे 'सैमा'नि सावगारि ?



1




2

(A) 1

(B) 2

12. गाहायनि बबेया मासे 'दाउजो'नि सावगारि ?



1



2

(A) 1

(B) 2

13. गाहायनि बबेया 'प'नि हांखो ?



1



2


(A) 1

(B) 2

14. गाहायनि बबेया 'द' हांखोनि महर ?



1



2

(A) 1

(B) 2

15. बबे सावगारिया सोदोबजों गोरोबो ?



बाथ'

1



बाथ'

2

(A) 1

(B) 2

16. बबे सावगारिया सोदोबजों गोरोबो ?



थुफि

1



थुफि

2

(A) 1

(B) 2

17. सावगारिनि बबे मुवाया 'ब' हांखोजों जागाय जेन्नाय ?



1



2

(A) 1

(B) 2

18. सावगारिनि बबे मुवाया 'क' हांखोजों जागाय जेन्नाय ?



1

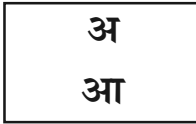


2

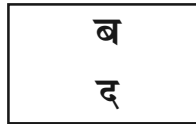
(A) 1

(B) 2

19. गाहायनि बबे हांखोया फारियै गोरोब लायो ?



1




2

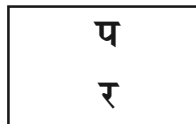
(A) 1

(B) 2

20. गाहायनि बबे हांखोफ्रा फारियै गोरोब लायो ?



1




2

(A) 1

(B) 2

Language-2 (Bengali)

11. নীচের কোনটি কুকুরের ছবি?



(ক) ১

(খ) ২

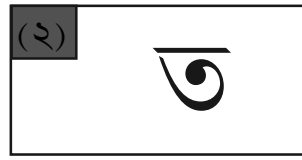
12. নীচের কোনটি মোরগের ছবি?



(ক) ১

(খ) ২

13. নীচের কোনটি 'ত' বর্ণ?



(ক) ১

(খ) ২

14. নীচের কোনটি 'ব' বর্ণ?



(ক) ১

(খ) ২

15. কোনটাতে সঠিক মিল আছে ?



ভাটো

ভাটো

(ক) ১

(খ) ২

16. কোনটিতে সঠিক মিল আছে?



টুপী

টুপী

(ক) ১

(খ) ২


17. নীচের ছবিতে কোনটির নাম 'ব' দিয়ে শুরু হয়?



(ক) ১

(খ) ২

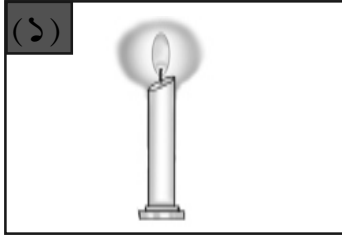
18. নীচের কোন বস্তুটির নাম 'ক' দিয়ে শুরু হয়।



(ক) ১

(খ) ২

19. নীচের কোনটিতে সঠিক মিল আছে?



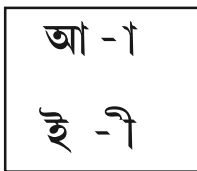
চাকি

চাকি

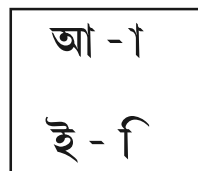
(ক) ১

(খ) ২

20. নীচের কোনটিতে স্বরবর্ণ এবং ব্যঞ্জনবর্ণের সাদৃশ আছে ?



(১)



(২)

(ক) ১

(খ) ২

Mathematics

21.



Ball 1




Ball 2

Which ball is in the box ?

(A) Ball 1

(B) Ball 2

22.



How many leaves are there inside the circle ?

(A) 3

(B) 4

23.



What is the shape of the board given in the figure ?

(A) Four cornered shape




(B) Three cornered shape

24. Biki has 3 apples. His father gives him 2 more apples. How many apples are there in his hand ?

(A) 4

(B) 5

25.

	2
	- 1
	

Look at the figure and write the subtracted value.

(A) 1

(B) 2

26.

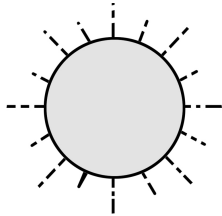
Fifteen	15
Sixteen	16
Seventeen	
Eighteen	18

Which of the following number will be in the blank place ?

(A) 17

(B) 14

27.






'The sun rises. I wake up.'

At what time you do this work ?

(A) Morning

(B) Afternoon

28.


	3
+ 	+ 2
	

Look at the figure and write the sum.

(A) 4

(B) 5

29.



Glass 1



Glass 2

Which glass is heavier ?

(A) Glass 1

(B) Glass 2

30. 2 tens 9 ones

-

tens	ones
	9

(A) 10

(B) 2

- o 0 o -

