

No. of Printed Pages : 15

Sl. No.
---------

Day - 3

# GUNOTSAV, PHASE-I, 2022

Set - C

Class : I

(Language-1, Language-2 & Maths)

Medium : Eng/Karbi

Name of the Student : .....

Roll No. : ..... Class : .....

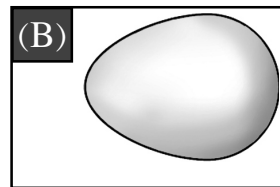

Name of the School : .....

## INSTRUCTIONS FOR TEACHERS



- \* Students will mark (✓) on the correct options against the Q.No 1 to 30.
- \* The teacher will read out the questions and ask the students to mark (✓) on the correct option. After that the teacher will darken the circle as the response of the students in presence of the External Evaluator.
- \* The teacher will fill in their names, Roll Nos, class, name of the school on their own.

### Language-1

1. Which of the following is the picture of a fox ?



2. Which of the following animals lives in holes ?




3. Complete the word by filling in the missing letter given below.

R	a	
---	---	--

(A) t

(B) h



4. Which of the following words has 'l' in it ?

(A) nail

(B) book

---

5. Which of the following word starts with the letter 'V' ?

(A) Fan

(B) Van

---

6. Which of the following words has the letter 'd' in it ?

(A) more


(B) done

---

7. Which of the following jumbled letters matches with the animal in the given picture ?

(A) neh

(B) xo



8. Which of the following things is used in Games ?

(A) Ball

(B) Pen

---


9. Which of the following is the name of an animal ?

(A) Milk

(B) Yak

---

10. Which of the following picture's name starts with letter 'K' ?



1



2


(A) 1

(B) 2

---

**Language-2 (English)**


11. Which of the following is the picture of a 'bat'?



(A) (1)

(B) (2)


12. Which of the following is the picture of a 'crow'?



(A) (1)

(B) (2)


13. Which of the following is the letter 'E' ?



(A) (1)

(B) (2)

14. Which of the following is the letter 'N' ?



(A) (1)

(B) (2)

---

15. Which of the following is the correct match ?



BUS


BUS

(A) (1)

(B) (2)

---

16. Which of the following is the correct match ?



ROSE


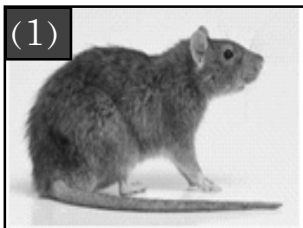
ROSE

(A) (1)

(B) (2)

---

17. Which object in the following pictures begins with the letter 'r' ?



(A) (1)

(B) (2)

---

18. Which object in the following pictures begins with the letter 't' ?

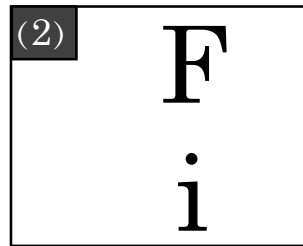
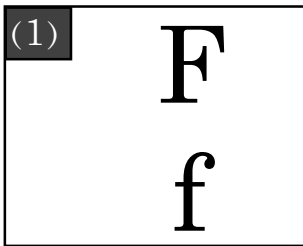


(A) (1)

(B) (2)

---

19. Which of the following is the correct match ?

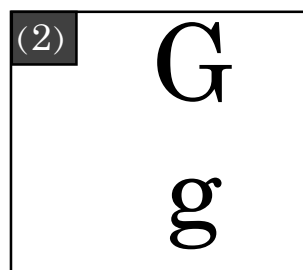
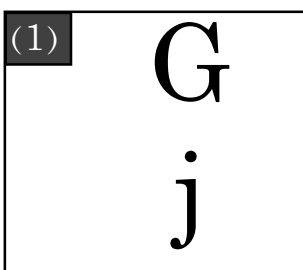


(A) (1)

(B) (2)

---

20. Which of the following is the correct match ?



(A) (1)

(B) (2)

---

**Language-2 (Karbi)**

11. La aber kolo abangsi 'BAT' arjan lo?



(A) (1)

(B) (2)


12. La aber kolo abangsi 'VOAK' arjan lo?



(A) (1)

(B) (2)

13. La aber kolo abangsi 'E' amek lo?



(A) (1)

(B) (2)

14. La aber koloa bang si 'N' amek lo?




(A) (1)



(B) (2)

---

15. Kolo abang si kechok lo?



BUS

(A) (1)



BUS

(B) (2)

---

16. Kolo abang si kechok lo?



MIR GULAP

(A) (1)

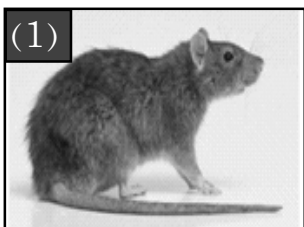


MIR GULAP


(B) (2)

---

17. Koloso arjan abang si amen kecheng along 'P' amek kedo lo?




(A) (1)



(B) (2)

---

18. Koloso arjan abang si amen kecheng along 'T' amek kedo lo?

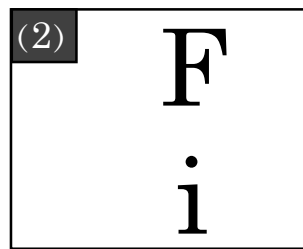
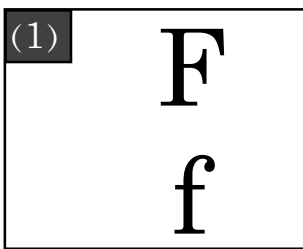


(A) (1)

(B) (2)

---

19. Kechok kolo abang lo?.

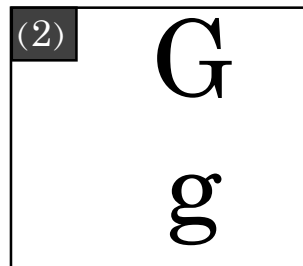
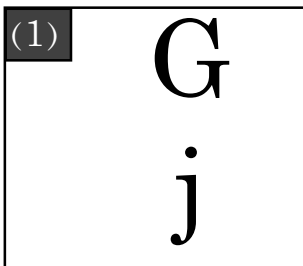


(A) (1)

(B) (2)

---

20. Kechok kolo abang lo?.



(A) (1)

(B) (2)

---



**Language-2 (Assamese)**

11. তলৰ কোনখন 'কলহ'ৰ ছবি?



1




2

(A) 1

(B) 2

12. তলৰ কোনখন 'পাৰ চৰাই'ৰ ছবি?



1



2

(A) 1

(B) 2

13. তলৰ কোনটো আখৰ 'এ'?



1



2

(A) 1

(B) 2

14. তলৰ কোনটো আখৰ 'ম'?



1



2

(A) 1

(B) 2

15. তলৰ কোনখন ছবিৰ নামটো শুদ্ধকৈ দিয়া আছে?



উৰাজাহাজ

1



উৰাজাহাজ

2

(A) 1

(B) 2

16. তলৰ কোনখন ছবিৰ নামটো শুদ্ধকৈ দিয়া আছে?



আনাৰস

1




আনাৰস

2


(A) 1

(B) 2

17. ছবিত থকা কোনটো জন্তুৰ নাম 'হ' আখৰেৰে আৰম্ভ হৈছে?



1



2

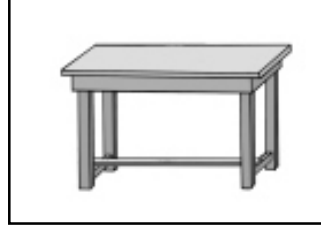
(A) 1

(B) 2

18. ছবিত থকা কোনটো বস্তুৰ নাম 'চ' আখৰেৰে আৰম্ভ হৈছে?



1



2

(A) 1

(B) 2

19. তলৰ কোনটো শাৰী শুদ্ধ ক্ৰমত আছে?



1

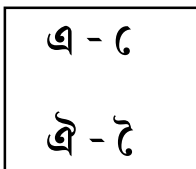


2

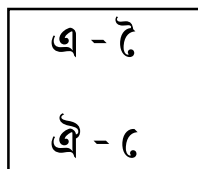
(A) 1

(B) 2

20. তলৰ কোনটো বাক্যত স্বৰবৰ্ণ আৰু স্বৰচিহ্নৰ মিল আছে?



1



2

(A) 1

(B) 2

**Mathematics**



Which fruit is heavier ?

(A) Mango

(B) Pineapple

---



How many fingers are there in one hand ?

(A) 4

(B) 5

---



What is the shape of the door in the house given in figure ?

(A) Four cornered shape

(B) Three cornered shape

---

24. Biki has 3 apples.




His father gives him 2 more apples.

How many apples are there in his hand ?

(A) 1

(B) 5

25.


	2
	- 1
	

Look at the figure and write the subtracted value.

(A) 1

(B) 3

26.

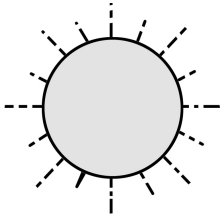


What is the number in the blank flower ?

(A) 10

(B) 12

27.



'The sun rises. I wake up.'

At what time you do this work ?

(A) Morning

(B) Afternoon

---

28.

4	
+3	+

Look at the picture and write the sum.

(A) 6

(B) 7

---

29.



Coconut



Leaf

Which one is lighter ?

(A) Coconut

(B) Leaf

---

30. 2 tens 2 ones =

tens	ones
2	

What will be the number in the blank place ?

(A) 2

(B) 10

- o 0 o -