

Sl. No.

Name of the Student :

Roll No. : Class :


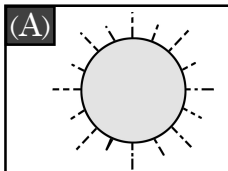
Name of the School :

INSTRUCTIONS FOR TEACHERS



- * Students will mark (✓) on the correct options against the Q.No 1 to 30.
- * The teacher will read out the questions and ask the students to mark (✓) on the correct option. After that the teacher will darken the circle as the response of the students in presence of the External Evaluator.
- * The teacher will fill in their names, Roll Nos, class, name of the school on their own.

Language-1

1. Which of the following is the picture of an axe ?



2. Which of the following animals can fly in the sky ?



3. Complete the word by filling in the missing letter given below.

B a

(A) r

(B) t



4. Which of the following words has 'e' in it ?

(A) tree

(B) lion

5. Which of the following words starts with the letter 'M' ?

(A) **J**ug

(B) **M**an

6. Which of the following words has the letter 'r' in it ?

(A) car

(B) net

7. Which of the following jumbled letters matches with the animal in the given picture ?



(A) art

(B) ogd

8. Which of the following things is used to write ?

(A) Candle

(B) Pen

9. Which of the following is the name of a bird ?

(A) Dove


(B) ant

10. Which of the following picture's name starts with the letter 'T' ?



1

(A) 1




2

(B) 2

Language-2 (English)



11. Which of the following is the picture of a 'carrot'?



(A) (1)

(B) (2)

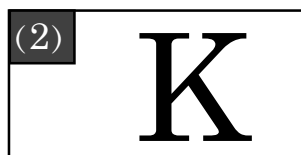
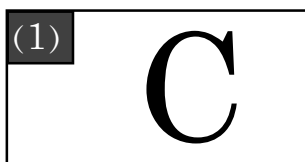
12. Which of the following is the picture of a 'horse'?



(A) (1)

(B) (2)

13. Which of the following is the letter 'C' ?



(A) (1)

(B) (2)



14. Which of the following is the letter 'A' ?



(A) (1)

(B) (2)

15. Which one of the following is the correct match ?




APPLE

APPLE

(A) (1)

(B) (2)

16. Which one of the following is the correct match ?



TOMATO

TOMATO

(A) (1)

(B) (2)



17. Which object in the following picture begins with the letter 'm' ?



(A) (1)

(B) (2)

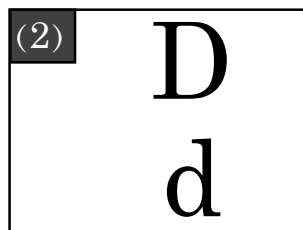
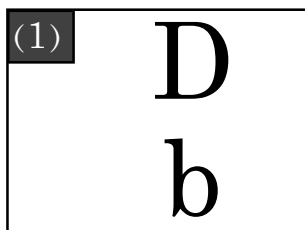
18. Which object in the following pictures begins with the letter 'f' ?



(A) (1)

(B) (2)

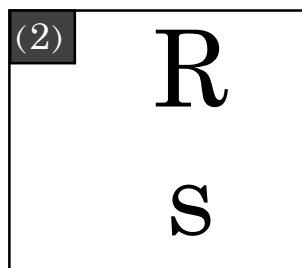
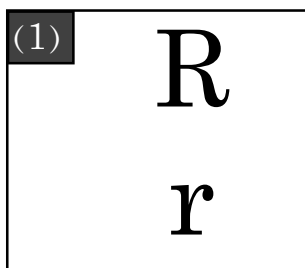
19. Which of the following is correct match ?



(A) (1)

(B) (2)

20. Which of the following is correct match ?





(A) (1)

(B) (2)

Language-2 (Karbi)



11. La aber kolo abangsi 'GAJOR' arjan lo?



(A) (1)

(B) (2)

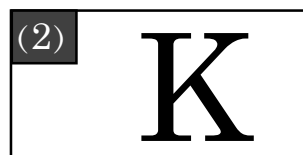
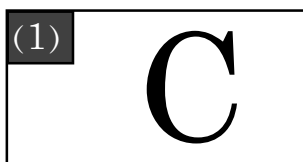
12. La aber kolo abangsi 'LOSAI' arjan lo?



(A) (1)

(B) (2)

13. La aber kolo abangsi 'C' amek lo?



(A) (1)

(B) (2)

14. La aber koloa bang si 'A' amek lo?



(A) (1)

(B) (2)

15. Kolo abang si kechok lo?




APPLE

APPLE

(A) (1)

(B) (2)

16. Kolo abang si kechok lo?



BOKBOK

BOKBOK

(A) (1)

(B) (2)



17. Koloso arjan abang si amen kecheng along 'M' amek kedo lo?



(A) (1)

(B) (2)

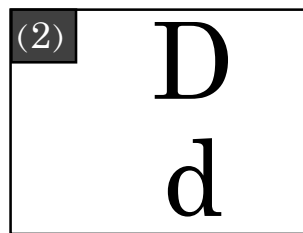
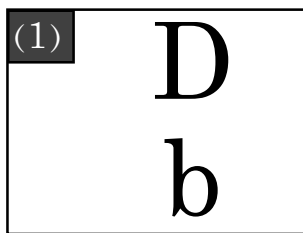
18. Koloso arjan abang si amen kecheng along 'F' amek kedo lo?



(A) (1)

(B) (2)

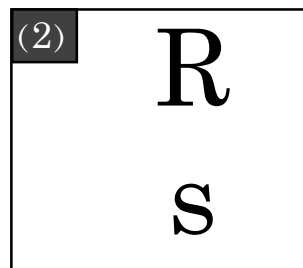
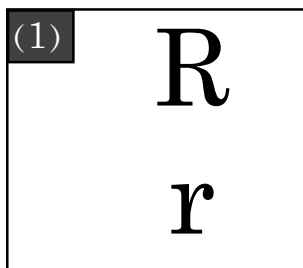
19. Kechok kolo abang lo?.



(A) (1)

(B) (2)

20. Kechok kolo abang lo?.

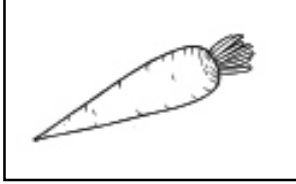


(A) (1)

(B) (2)

Language-2 (Assameses)

11. তলৰ কোনখন 'গাজৰ'ৰ ছবি?



1



2


(A) 1

(B) 2

12. তলৰ কোনখন 'বাদুলী'ৰ ছবি?



1



2

(A) 1

(B) 2

13. তলৰ কোনটো আখৰ 'থ'?



1




2

(A) 1

(B) 2

14. তলৰ কোনটো আখৰ 'চ'?



1



2

(A) 1

(B) 2

15. তলৰ কোনখন ছবিৰ নামটো শুদ্ধকৈ দিয়া আছে?



1

কল



2

কল

(A) 1


(B) 2

16. তলৰ কোনখন ছবিৰ নামটো শুদ্ধকৈ দিয়া আছে?



1

চাবোন



2

চাবোন

(A) 1

(B) 2

17. ছবিত থকা কোনটো বস্তুৰ নাম 'ৰ' আখৰেৰে আৰম্ভ হৈছে?



1



2

(A) 1

(B) 2

18. ছবিত থকা কোনটো বস্তুৰ নাম 'ব' আখৰেৰে আৰম্ভ হৈছে?



1

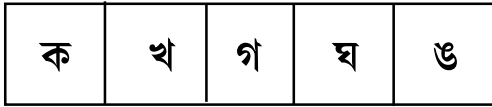


2

(A) 1

(B) 2

19. তলৰ কোনটো শাৰী শুদ্ধ ক্ৰমত আছে?



1

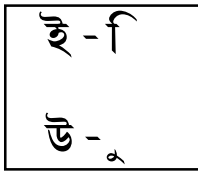


2

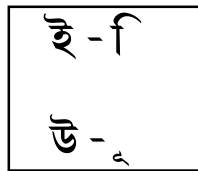
(A) 1

(B) 2

20. তলৰ কোনটো বাক্যত স্বৰবৰ্ণ আৰু স্বৰচিহ্নৰ মিল আছে?



1



2

(A) 1

(B) 2

Mathematics

21.



Tree 1

Tree 2

Which of the following tree is far away from the house ?

(A) Tree 1

(B) Tree 2

22.



How many fishes are there in the picture ?

(A) 2

(B) 3

23.



What is the shape of the wheels of a bicycle ?

(A) Round shape

(B) Three cornered shape

24. Biki has 3 apples.




His father gives him 2 more apples.

How many apples are there in his hand ?

(A) 3

(B) 5

25.

	3
	- 1
	

Look at the figure and write the subtracted value.

(A) 2

(B) 3

26.

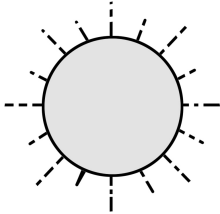
12	Twelve
13	Thirteen
	Fourteen
15	Fifteen

Which of the following will be in the blank place ?

(A) 11

(B) 14

27.





'The sun rises. I wake up.'

At what time you do this work ?

(A) Morning

(B) Afternoon

28.

	5 + 2
	

Look at the picture and write the sum.

(A) 7

(B) 8

29.



Pencil 1



Pencil 2

Which of the above pencils is longer ?

(A) Pencil 1

(B) Pencil 2

30. Three tens six ones =

tens	ones
3	

What will be the number in the blank place ?

(A) 6

(B) 10

- o 0 o -