

No. of Printed Pages : 15

Sl. No.
---------

Day - 1

# GUNOTSAV, PHASE-I, 2022

Set - A

Class : I

(Language-1, Language-2 & Maths)

Medium : Eng/Karbi

Name of the Student : .....

Roll No. : ..... Class : .....



Name of the School : .....

## INSTRUCTIONS FOR TEACHERS


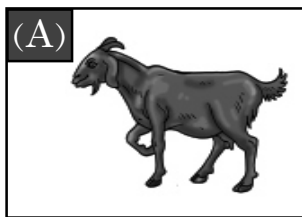
- \* Students will mark (✓) on the correct options against the Q.No 1 to 30.
- \* The teacher will read out the questions and ask the students to mark (✓) on the correct option. After that the teacher will darken the circle as the response of the students in presence of the External Evaluator.
- \* The teacher will fill in their names, Roll Nos, class, name of the school on their own.

### Language-1

1. Which of the following is the picture of a butterfly ?



2. Which of the following animals live in water ?



3. Complete the word by filling in the missing letter given below.

c	a	
---	---	--

(A) t

(B) i



4. Which of the following words has 'a' in it ?

- (A) ten (B) axe
- 

5. Which of the following words starts with the letter 'H' ?

- (A) **B**all (B) **H**at
- 

6. Which of the following words has the letter 't' in it ?

- (A) ant (B) fan
- 

7. Which of the following jumbled letters matches with the animal in the given picture ?

- (A) wco  
(B) afx



8. Which of the following things is used in the kitchen ?

- (A) Pan (B) Pen
- 

9. Which of the following is the name of a flower ?

- (A) Rose (B) Apple
- 


10. Which of the following picture's name starts with the letter 'D' ?



- (A) 1 (B) 2
-

**Language-2 (English)**



11. Which of the following is the picture of a 'dog' ?



(A) (1)

(B) (2)

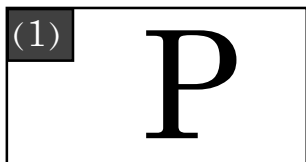
12. Which of the following is the picture of a 'hen' ?



(A) (1)

(B) (2)

13. Which of the following is the letter 'P' ?



(A) (1)

(B) (2)

14. Which of the following is the letter 'D' ?



(A) (1)

(B) (2)

---

15. Which one of the following is the correct match ?



PARROT


PARROT

(A) (1)

(B) (2)

---

16. Which one of the following is the correct match ?



CAP

CAP

(A) (1)

(B) (2)

---

17. Which object in the following pictures begins with the letter 'b' ?





(A) (1)

(B) (2)

---

18. Which object in the picture begins with the letter 'p' ?

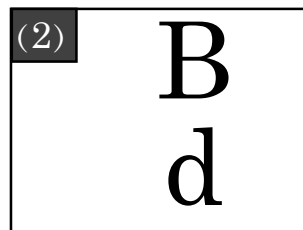
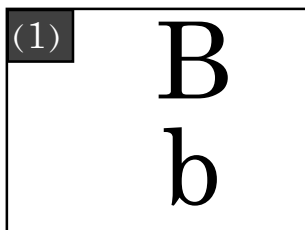


(A) (1)

(B) (2)

---

19. Which one of the following is the correct match ?

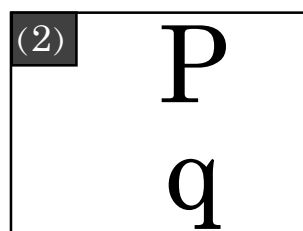
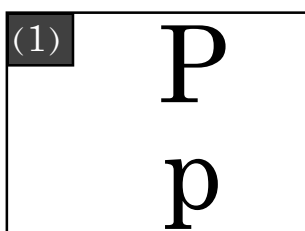


(A) (1)

(B) (2)

---

20. Which one of the following is the correct match ?



(A) (1)

(B) (2)

---

**Language-2 (Karbi)**

11. La aber kolo abangsi 'Methan' arjan lo?



(A) (1)

(B) (2)

---

12. La aber kolo abangsi 'Vokeme' arjan lo?



(A) (1)

(B) (2)

---

13. La aber kolo abangsi 'P' amek lo ?



(A) (1)

(B) (2)

---

14. La aber koloa bang si 'D' amek lo?



(A) (1)

(B) (2)

---

15. Kolo abang si kechok lo?



VOKEK

VOKEK

(A) (1)

(B) (2)

---

16. Kolo abang si kechok lo?



PHUTUP

PHUTUP

(A) (1)

(B) (2)

---

17. Koloso arjan abang si amen kecheng along 'B' amek kedo lo?




(A) (1)

(B) (2)

---

18. Koloso arjan abang si amen kecheng along 'K' amek kedo lo?

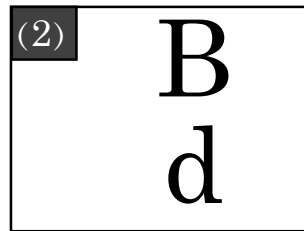
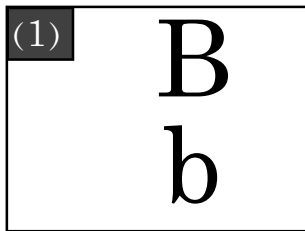


(A) (1)

(B) (2)

---

19. Kechok kolo abang lo?.

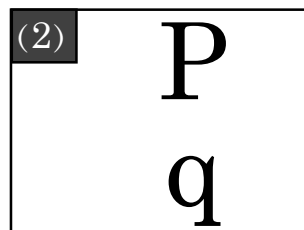
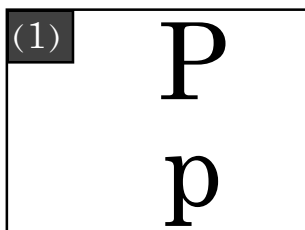


(A) (1)

(B) (2)

---

20. Kechok kolo abang lo?.



(A) (1)

(B) (2)

---




**Language-2 (Assamese)**

11. তলৰ কোনখন 'কুকুৰ'ৰ ছবি?



1




2


(A) 1

(B) 2

12. তলৰ কোনখন 'কুকুৰা'ৰ ছবি?



1



2

(A) 1

(B) 2

13. তলৰ কোনটো আখৰ 'ত'?



1



2

(A) 1

(B) 2

14. তলৰ কোনটো বৰ্ণ 'গ'?



1



2

(A) 1

(B) 2

15. তলৰ কোনখন ছবিৰ নামটো শুদ্ধকৈ দিয়া আছে?



ভাটৌ

1



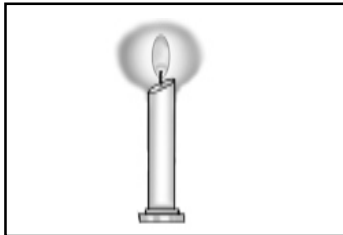
ভাটৌ

2

(A) 1

(B) 2

16. তলৰ কোনখন ছবিৰ নামটো শুদ্ধকৈ দিয়া আছে?



চাকি

1




চাকি

2

(A) 1

(B) 2

17. ছবিত থকা কোনটো বস্তুৰ নাম 'ত' আখৰেৰে আৰম্ভ হৈছে?



1



2


(A) 1

(B) 2

18. ছবিত থকা কোনটো চৰাইৰ নাম 'ফ' আখৰেৰে আৰম্ভ হৈছে?



1



2

(A) 1

(B) 2

19. তলৰ কোনটো শাৰী শুদ্ধ ক্ৰমত আছে?



1

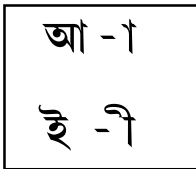


2

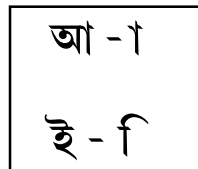
(A) 1

(B) 2

20. তলৰ কোনটো বাক্যত স্বৰবৰ্ণ আৰু স্বৰচিহ্নৰ মিল আছে?



1



2

(A) 1

(B) 2

**Mathematics**



**Ball 1**




**Ball 2**

Which ball is in the box ?

(A) Ball 1

(B) Ball 2

---



How many leaves are there inside the circle ?

(A) 3

(B) 4

---



What is the shape of the board given in the figure ?

(A) Four cornered shape

(B) Three cornered shape

---




24. Biki has 3 apples. His father gives him 2 more apples. How many apples are there in his hand ?

(A) 4

(B) 5

---

25.

	2
	- 1
	

Look at the figure and write the subtracted value.

(A) 1

(B) 2

---

26.

Fifteen	15
Sixteen	16
Seventeen	
Eighteen	18

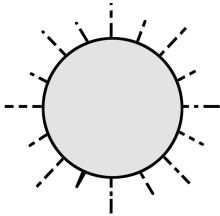
Which of the following number will be in the blank place ?

(A) 17

(B) 14

---

27.






'The sun rises. I wake up.'

At what time you do this work ?

(A) Morning

(B) Afternoon

28.


	3
+ 	+ 2
	

Look at the figure and write the sum.


(A) 4

(B) 5

29.



Glass 1



Glass 2

Which glass is heavier ?

(A) Glass 1

(B) Glass 2

30. 2 tens 9 ones

-

tens	ones
	9

(A) 10

(B) 2

- o 0 o -