

No. of Printed Pages : 8

Sl. No.

Day - 3

गुन'त्सव, PHASE-I, 2022

Set - C

थाखो : I

(Language-1, Language-2 & Maths)

बिजो : बर'

Name of the Student :

Roll No. : Class :


Name of the School :

फोरोगिरिसिम बिथोन



- सोथि नं 1 निफ्राय 30 सिम फरायसाफ्रा गेबें फिननायाव (✓) सिन होगोन।
- फोरोगिरिआ सोथिफोरखौ फरायसाफोरनो फरायना खोनासंहोगोन गेबें फिननायाव (✓) सिन होनो बुंगोन। उनाव फरायसाफ्रा (✓) सिनहोनाय बादियै फोरोगिरिया External Evaluator नि सिगाडाव OMR Sheet नि बेंखनफोरखौ सुफुंगोन।
- फरायसाफोरनि मुं, र'लनं, थाखो, फरायसालिनि मुं नि खारिफोरखौ फोरोगिरिआ सुफुंगोन।

Language-1

1. गाहायनि बबेया सियालनि सावगारि ?



2. सावगारि मोननैनि बबे जिउनाडा गुदुडाव थायो बुं।




3. गाहायाव होनाय बबे हांखोखौ दाजाबोब्ला सोदोबा आबुं जागोन।

क ला

(A) म

(B) ल



4. "औ" महर दाजाब जानाय सोदोबखौ सायख 'ना दिहन।

(A) जेखाइ

(B) आबौ

5. गाहायाव होनाय बबे सोदोबाव 'उ' आखर दं ?

(A) दाउ

(B) माव

6. गाहायाव होनाय बबे सोदोबाव "च" हांखोया दड।

(A) चशमायाव

(B) मेगनाव

7. गाहायनि बबे सारियाव सावगारियाव थानाय जिउनांनि मुंनि हांखोफोरा थाखोमानानै दड।

(A) य रा उ दा



(B) ला जो उ दा

8. गाहायाव होनाय बबेया गेलेनायाव बाहाय जानाय आइजे।

(A) बल

(B) कलम

9. गाहायाव होनाया बबे जुनारनि मुं।


(A) ईगल

(B) मैसो

10. गाहायनि बबे सावगारिनि मुंआ 'म' आखरयो जादों ?




(A) (1)



(B) (2)

Language-2


11. Which of the following is the picture of a 'bat'?



(A) (1)

(B) (2)


12. Which of the following is the picture of a 'crow'?



(A) (1)

(B) (2)



13. Which of the following is the letter 'E' ?



(A) (1)

(B) (2)


14. Which of the following is the letter 'N' ?



(A) (1)

(B) (2)

15. Which of the following is the correct match ?




BUS

BUS

(A) (1)

(B) (2)

16. Which of the following is the correct match ?




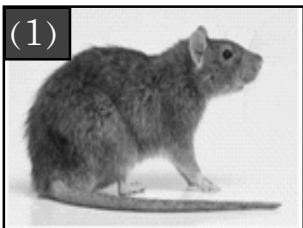
ROSE

ROSE

(A) (1)

(B) (2)


17. Which object in the following pictures begins with the letter 'r' ?



(A) (1)

(B) (2)

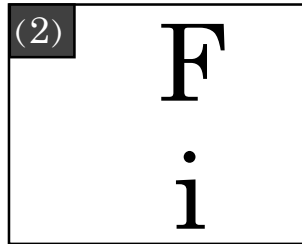
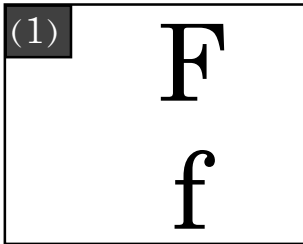
18. Which object in the following pictures begins with the letter 't' ?



(A) (1)

(B) (2)

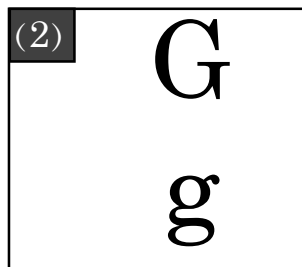
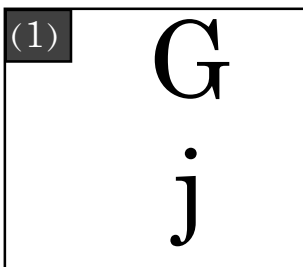
19. Which of the following is the correct match ?



(A) (1)

(B) (2)

20. Which of the following is the correct match ?



(A) (1)

(B) (2)

Mathematics

21.



रइमालि



थाइजौ

बबे फिथाइआ बांसिन गिलिद ?

(क) थाइजौ

(ख) रइमालि

22.



जौनि फारसे आखाइयाव थानाय आसिफोरनि अनजिमाया बेसेबां ?

(क) 4

(ख) 5

23.



सावगारियाव थानाय न'नि खिरखिनि महरा माबायदि ?

(क) ब्रैख 'नाआरि




(ख) बैखनआरि

24. बिखिनि आखायाव दंमोन 3 थाइ आपेल । बिफाया बिखिनो आरो 2 थाइ आपेल होबावयो ।
बिखिनि आखाइयाव दानिया गासै बेसेबां आपेल ज 'मा जाखो ?

(क) 1

(ख) 5

25.


	2
	- 1
	

सावगारिखौ नायनानै गेबें दानख 'गासैआ बेसेबां जागोन ?

(क) 1

(ख) 3

26.

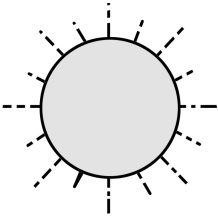


लांदां बिबारनि गेजेराव मा अनजिमा ज 'गोन ?

(क) 10

(ख) 12

27.






'सानआ औंखारबाय । आं उन्दुनायनिफ्राय सिखारबाय'

बबे समाव नों बे खामानिखौ मावखो ?

(क) फुंबिलियाव

(ख) मोनाबिलियाव

28.

4	
+ 3	+ 
	

सावगारियाव नायना साननानै आरो गेबें दाजाबगासैआ मा जागोन ?

(क) 6

(ख) 7

29.



नारिखल



बिलाइ

गोजैनि बबे सावगारिया किथायखौ दिन्थियो ?

(क) नारिखल

(ख) बिलाइ

30. नै जि नै =

मुंजि	मुंसे
2	

लांदां थानाय मुंसेनि खथायाव मा अनजिमा जागोन ?

(क) 2

(ख) 10

- o o o -